

test 7


Questions 1 – 5

Listen to the first part of the recording and complete the gaps in the flowchart.  
Write **NO MORE THAN TWO WORDS AND/OR A NUMBER** for each answer.



**Question 6-10**

**Write NO MORE THAN ONE WORD AND/OR A NUMBER for each answer.**



**Harvey's Homewares**

Faulty Product Replacement Instruction

Product Make: Gleeware

Model: Breadmaker 3

Model NO: 6 .....

Shop where bought: Bluewater

Date of purchase: 2.12.06.

Customer surname: 7 ..... Initials: J.H

House number: 8 ..... Road name: .....

Postcode: AD22 4SC

Home phone: 08896 3412877

Day of delivery. 10 .....


**SECTION 2**  
**SECTION 2**

**Questions 11—15**

**write NO MORE THAN THREE WORDS AND/OR A NUMBER for each answer.**

What three kinds of people are listening to the talk?

11 .....



12 .....

13 .....

14 What will you need to do to visit the Fieldhouse Library?

.....

15 What is necessary for gaining access to the library? .....

**Questions 16—20**

**Write NO MORE THAN TWO WORDS AND/OR A NUMBER for each answer.**

**What are the two collections which have not yet been fully moved in?**

16 .....

17 .....

18 What is currently being built?

.....

19 How many computer places have been installed?

.....


20 What else can you get from the librarians if you ask?

.....

**SECTION 3**

**Questions 21 – 23 complete the notes below.**

**NO MORE THAN TWO WORDS AND / OR A NUMBER for each answer.**



Presentation focus 21 ..... Animals.  
Presentation time: 20 Minutes

Pros: Plenty of 22 ..... For the Presentation: interesting subject  
Cons: Difficult to 23 .....

**QUESTIONS 24-26**

Choose **THREE** letters A-G

Which **THREE** ways does the tutor suggest Katie and Ian can improve their presentation?

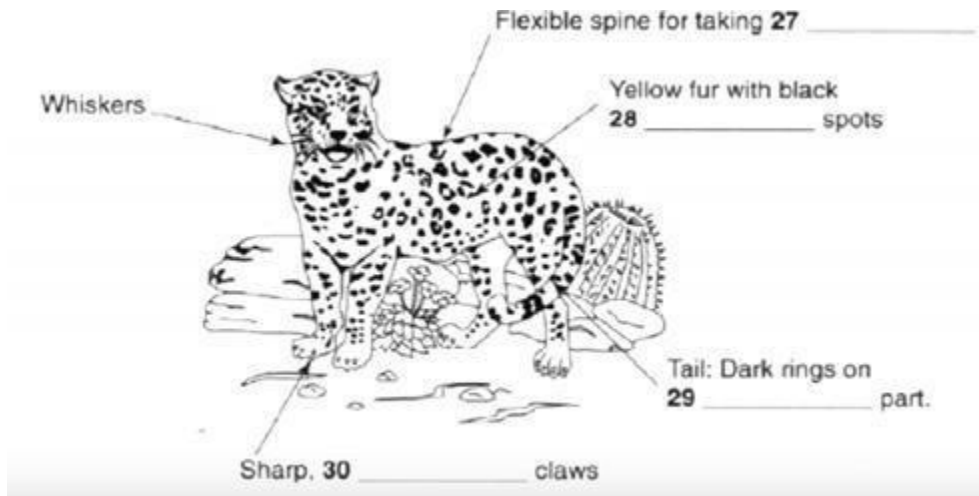
- A do their research on the internet
- B limit the amount of detail within the presentation
- C separate the presentation into clearer sections
- D use some video clips
- E focus on only a selection of animals
- F make sure they practice the presentation
- G think of some discussion questions for the audience

24 .....      25 .....      26 .....

**Questions 27 – 30**

complete the diagram below

Write **NO MORE THAN TWO WORDS AND/OR A NUMBER** for each answer.



**SECTION 4**

Choose **FIVE** answers from the box and write the correct letter. A-6, next to



- 31 Aborigines .....
- 32 Dutch explorer .....
- 33 Sir Hugh Palliser .....
- 34 Captain James Cook .....
- 35 Dr. Arthur Penfold .....

**Questions 31-35.**

What incident is related to each of the following people?

- A brought tea tree oil into Australia in 1770
- B challenged the benefit of tea tree oil
- C reported the special eating habit in Australia
- D listed plant species
- E studied the tea tree oil
- F saw Australian Aborigines drink
- G used tea tree for medical treatment

**Questions 36-40**

**complete the sentences below.**

**Write ONE WORD ONLY FOR each answer.**

36 Tea tree will store oil during ..... and accumulate the useful substance.

37 put leaves and.....in for distillation.

38 The Oil vapor rises up to the.....of the container.

39 According to the principle of ..... the condensed steam goes downside.

40 the water will go through the tubes onto the .....

## Answer

1 REPAIR CENTRE

2 (AN) ESTIMATE

3 AGREE

4 COLLECT

5 3/ THREE

6 217980345

7 YONGE

8 15

9 CAPERCAILLIE

10 MONDAY

11 FULL-TIME STUDENTS

12 PART-TIME STUDENTS

13 DISTANCE LEARNERS

14 MAKE AN APPOINTMENT

15 (YOUR) ID CARD

16 ECONOMICS

17 FRENCH LITERATURE

18 THE NEW RESTAURANT

19 150

20 NATIONAL NEWSPAPERS

21 NOCTURNAL

22 VISUALAIDS

23 NARROW DOWN

24 D (IN ANY ORDER)

25 E (IN ANY ORDER)

26 G (IN ANY ORDER)

27 LONG STRIDES

28 DOUGHNUT-SHAPED/ DONUT-SHAPED/ DOUGHNUT SHAPED/ DONUT SHAPED

29 LOWER

30 RETRACTABLE

31 G

32 C

33 B

34 F

35 E

36 WINTER

37 STEMS

38 LID

39 GRAVITY

40 GROUND